

Name : \_\_\_\_\_

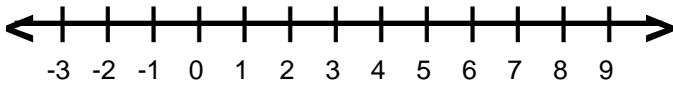
Score : \_\_\_\_\_

Teacher : \_\_\_\_\_

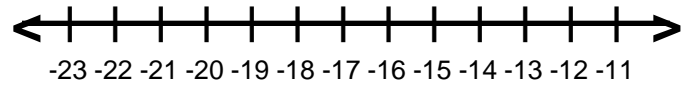
Date : \_\_\_\_\_

## Solve and Graph the Inequalities

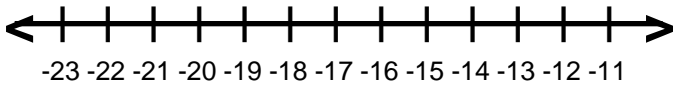
1)  $f - 8 \leq -7$



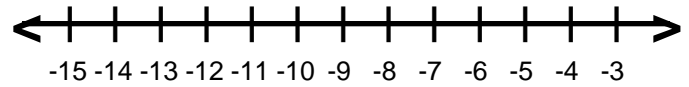
6)  $j + 7 \leq -7$



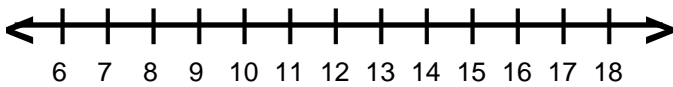
2)  $-6 \geq n + 9$



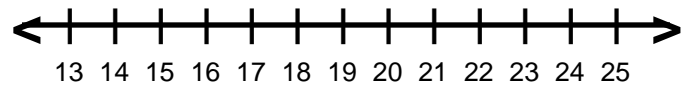
7)  $r - 6 \leq -17$



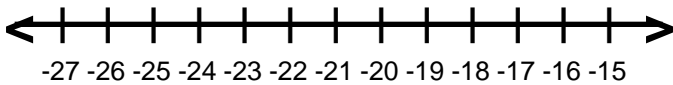
3)  $10 \geq c - 2$



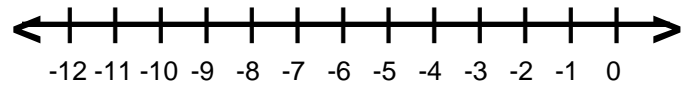
8)  $g - 8 \geq 7$



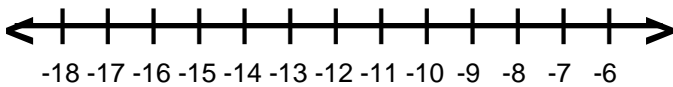
4)  $-19 \geq x - 2$



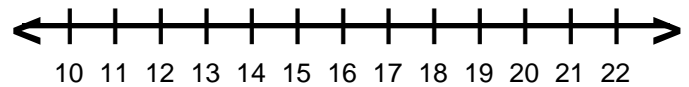
9)  $-12 \leq -3 + p$



5)  $-7 \geq 7 + w$



10)  $16 \leq -2 + v$



Name : \_\_\_\_\_

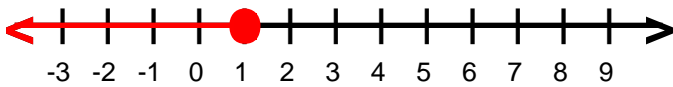
Score : \_\_\_\_\_

Teacher : \_\_\_\_\_

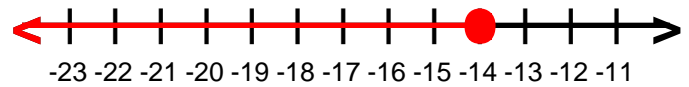
Date : \_\_\_\_\_

## Solve and Graph the Inequalities

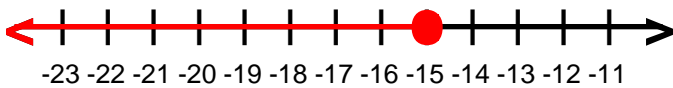
1)  $f \leq 1$



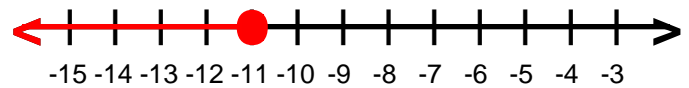
6)  $j \leq -14$



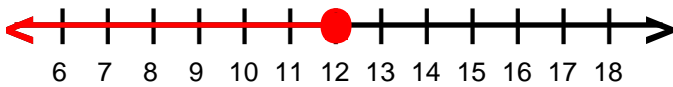
2)  $n \leq -15$



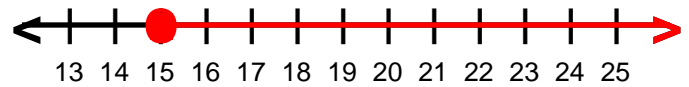
7)  $r \leq -11$



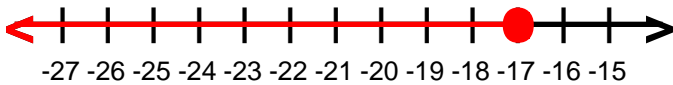
3)  $c \leq 12$



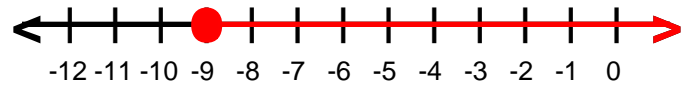
8)  $g \geq 15$



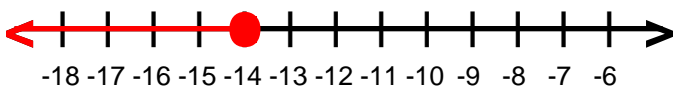
4)  $x \leq -17$



9)  $p \geq -9$



5)  $w \leq -14$



10)  $v \geq 18$

